


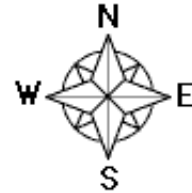
**Use a globe or world map to follow Magellan's route.**

1. In 1591, Magellan's five ships sailed from near  $37^{\circ}\text{N}$ ,  $6^{\circ}\text{W}$ . What country did they sail from?


**S** \_\_\_\_\_

2. He sailed southwest to roughly  $28^{\circ}\text{N}$ ,  $16^{\circ}\text{W}$ . What island chain was he in?

\_\_\_\_\_  \_\_\_\_\_




3. Magellan headed southwest to the Tropic of Capricorn and  $45^{\circ}\text{W}$ . What country was he in?

\_\_\_\_\_  \_\_\_\_\_


4. He went *SSW* to  $52^{\circ}\text{S}$ ,  $69^{\circ}\text{W}$ , where he cut west to the Pacific Ocean. This strait is now called the \_\_\_\_\_

\_\_\_\_\_  \_\_\_\_\_


5. He went *NW* in the Pacific Ocean (which he named) to Pukapuka at  $11^{\circ}\text{S}$ ,  $166^{\circ}\text{W}$ . What chain is it in?

\_\_\_\_\_  \_\_\_\_\_


6. Magellan continued northwest to  $18^{\circ}\text{N}$ ,  $145^{\circ}\text{E}$ . These islands are called the Northern ...

\_\_\_\_\_  \_\_\_\_\_

7. They went *SW* to  $10^{\circ}\text{N}$ ,  $123^{\circ}\text{E}$ , where Magellan was killed by islanders. What country did he die in?

\_\_\_\_\_  \_\_\_\_\_

8. The crew continued southeast to  $9^{\circ}\text{S}$ ,  $126^{\circ}\text{E}$ . What country were they in?

 \_\_\_\_\_

9. They sailed *SW* to  $35^{\circ}\text{S}$ ,  $20^{\circ}\text{E}$ , sailing by which cape to enter the Atlantic Ocean?

\_\_\_\_\_  \_\_\_\_\_

10. They sailed *NW* to  $16^{\circ}\text{N}$ ,  $24^{\circ}\text{W}$ . One ship and 18 of the original 237 men were almost back home. They were at which island chain?

\_\_\_\_\_  \_\_\_\_\_



**Write the circled letters:** \_\_\_\_\_

**Unscramble the letters to find the mystery word:**

\_\_\_\_\_

## Global Treasure Hunt - Magellan Answers

Use a globe or world map to follow Magellan's route.

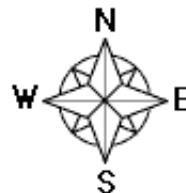
## Answers

1. In 1591, Magellan's five ships sailed from near  $37^{\circ}\text{N}$ ,  $6^{\circ}\text{W}$ . What country did they sail from?

S p a i n

2. He sailed southwest to roughly  $28^{\circ}\text{N}$ ,  $16^{\circ}\text{W}$ . What island chain was he in?

C a n a r y I s l a n d s



3. Magellan headed southwest to the Tropic of Capricorn and  $45^{\circ}\text{W}$ . What country was he in?

B r a z i l

4. He went SSW to  $52\frac{1}{2}^{\circ}\text{S}$ ,  $69^{\circ}\text{W}$ , where he cut west to the Pacific Ocean. This strait is now called the

S t r a i t o f M a g e l l a n

5. He went NW in the Pacific Ocean (which he named) to Pukapuka at  $11^{\circ}\text{S}$ ,  $166^{\circ}\text{W}$ . What chain is it in?

C o o k I s l a n d s

6. Magellan continued northwest to  $18^{\circ}\text{N}$ ,  $145^{\circ}\text{E}$ . These islands are called the Northern ...

M a r i a n a I s l a n d s

7. They went SW to  $10^{\circ}\text{N}$ ,  $123^{\circ}\text{E}$ , where Magellan was killed by islanders. What country did he die in?

P h i l i p p i n e s

8. The crew continued southeast to  $9^{\circ}\text{S}$ ,  $126^{\circ}\text{E}$ . What country were they in?


E a s t T i m o r

9. They sailed SW to  $35^{\circ}\text{S}$ ,  $20^{\circ}\text{E}$ , sailing by which cape to enter the Atlantic Ocean?

C a p e o f G o o d H o p e

10. They sailed NW to  $16^{\circ}\text{N}$ ,  $24^{\circ}\text{W}$ . One ship and 18 of the original 237 men were almost back home. They were at which island chain?

C a p e V e r d e I s l a n d s



Write the circled letters: n i f n d e a d r

Unscramble the letters to find the mystery word:

F e r d i n a n d